
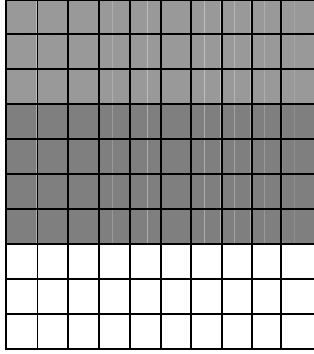



Όνομα: _____ Τάξη: _____ Ημερ. : _____

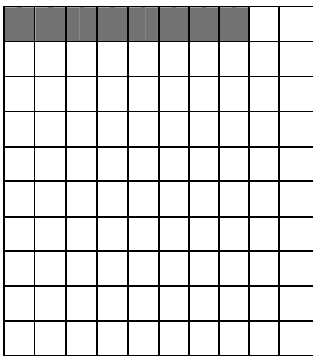
ΔΕΚΑΔΕΣ ΚΑΙ ΜΟΝΑΔΕΣ


1. Γράφω τον αριθμό που αντιστοιχεί στις δεκάδες και μονάδες που βλέπω.










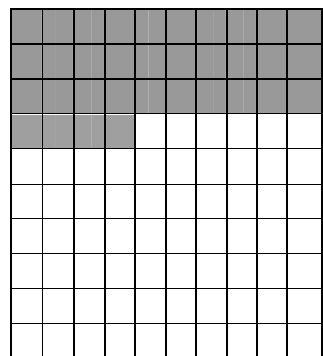















2. Χρωματίζω τόσα τετραγωνάκι όσα λέει ο αριθμός.




56




7




100




28




53




68



70



99



75

3. Γράφω ποιος είναι ο αριθμός που:

☺ Έχει 3 δεκάδες και 7 μονάδες: ____

☺ Έχει 0 δεκάδες και 7 μονάδες: ____

☺ Έχει 0 δεκάδες και 9 μονάδες: ____

☺ Έχει 9 δεκάδες και 9 μονάδες: ____

☺ Έχει 9 δεκάδες και 2 μονάδες: ____

☺